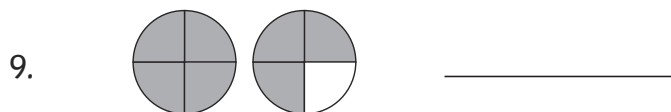
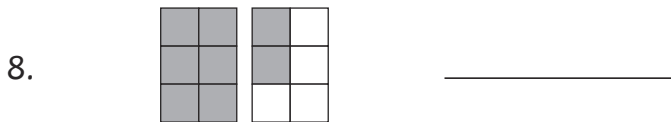
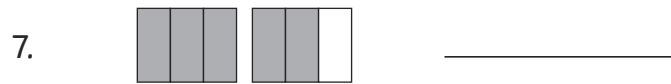
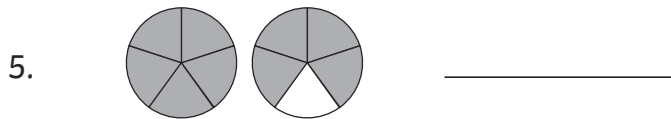
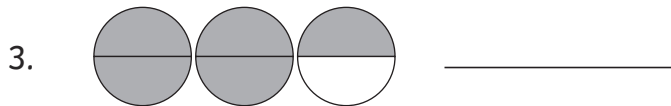
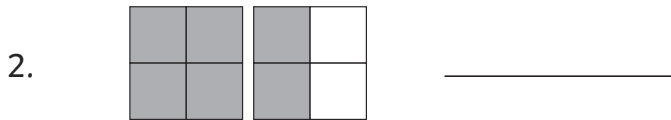
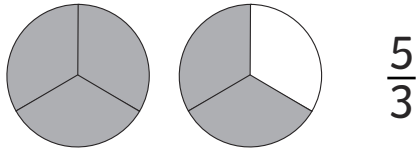


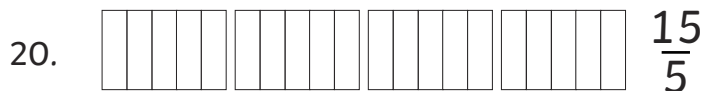
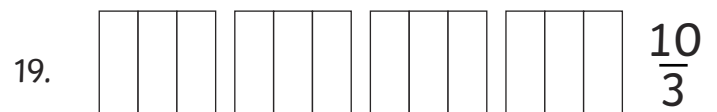
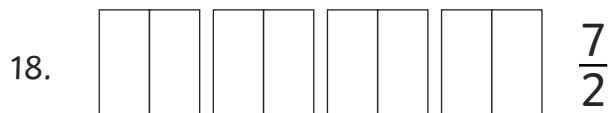
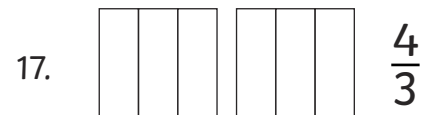
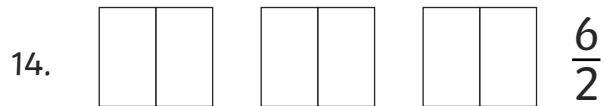
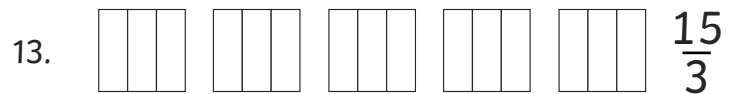
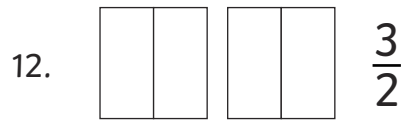
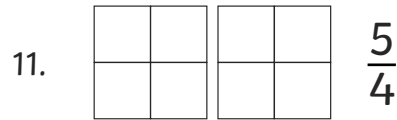
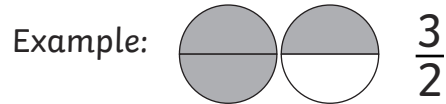
# Improper Fractions

Write the improper fractions shown below.

Example:



Shade in the appropriate amount for each improper fraction.



# Improper Fractions Answers

1.  $\frac{4}{3}$
2.  $\frac{6}{4}$
3.  $\frac{5}{2}$
4.  $\frac{9}{3}$
5.  $\frac{9}{5}$
6.  $\frac{5}{2}$
7.  $\frac{5}{3}$
8.  $\frac{8}{6}$
9.  $\frac{7}{4}$
10.  $\frac{8}{7}$

